



Length

Skill Questions

1. Draw a line that is each length.


a) 6 mm

b) 4.2 cm

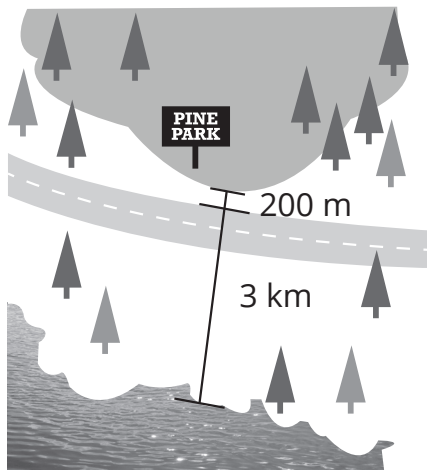
c) 8 cm

d) 10.7 cm

2. a) This table has a metre stick sitting on it.
How long is the table?



b) How far is it from the lake to the park?



3. Rename each measurement using a different length unit.

a) 14.8 cm

b) 6.2 m

c) 4.78 m

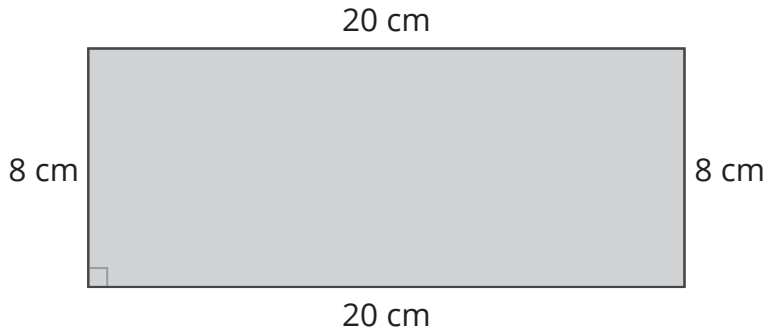
d) 750.9 m

e) 4.15 km

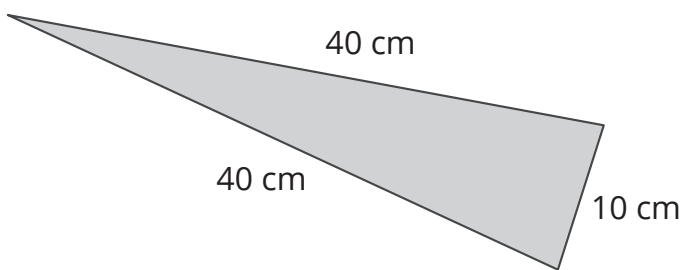
f) 10.23 km

4. What are the perimeters of the rectangle, the triangle, and the parallelogram below?

a)



b)



c)

